


































INTRO: RANDOM VARIABLES

Mr. Merrick · September 20, 2025

Consider the random sample from tikz village shown below. Tabulate the sample into a tidy data-frame.

						
Career: Engineer Weight: 86 kg Height: 183 cm Income: \$118k Pets: 1	Career: Business Weight: 81 kg Height: 178 cm Income: \$132k Pets: 0	Career: Chef Weight: 73 kg Height: 171 cm Income: \$62k Pets: 2	Career: Nurse Weight: 66 kg Height: 168 cm Income: \$94k Pets: 1	Career: Physician Weight: 78 kg Height: 185 cm Income: \$228k Pets: 1	Career: Pilot Weight: 82 kg Height: 181 cm Income: \$172k Pets: 0	Career: Cowboy Weight: 84 kg Height: 186 cm Income: \$55k Pets: 2
						
Career: Builder Weight: 92 kg Height: 187 cm Income: \$78k Pets: 0	Career: Business Weight: 88 kg Height: 182 cm Income: \$149k Pets: 1	Career: Chef Weight: 69 kg Height: 168 cm Income: \$57k Pets: 3	Career: Nurse Weight: 72 kg Height: 174 cm Income: \$88k Pets: 0	Career: Physician Weight: 74 kg Height: 179 cm Income: \$204k Pets: 2	Career: Pilot Weight: 79 kg Height: 176 cm Income: \$165k Pets: 1	Career: Cowboy Weight: 77 kg Height: 180 cm Income: \$51k Pets: 1
						
Career: Engineer Weight: 89 kg Height: 186 cm Income: \$127k Pets: 2	Career: Pilot Weight: 86 kg Height: 181 cm Income: \$181k Pets: 1	Career: Physician Weight: 70 kg Height: 177 cm Income: \$193k Pets: 0	Career: Nurse Weight: 64 kg Height: 165 cm Income: \$86k Pets: 1	Career: Chef Weight: 82 kg Height: 178 cm Income: \$67k Pets: 1	Career: Business Weight: 76 kg Height: 175 cm Income: \$121k Pets: 0	Career: Cowboy Weight: 80 kg Height: 182 cm Income: \$58k Pets: 3
						
Career: Business Weight: 90 kg Height: 186 cm Income: \$171k Pets: 1	Career: Builder Weight: 85 kg Height: 181 cm Income: \$72k Pets: 2	Career: Nurse Weight: 69 kg Height: 170 cm Income: \$95k Pets: 2	Career: Physician Weight: 82 kg Height: 188 cm Income: \$239k Pets: 0	Career: Pilot Weight: 75 kg Height: 178 cm Income: \$159k Pets: 0	Career: Chef Weight: 77 kg Height: 173 cm Income: \$64k Pets: 2	Career: Cowboy Weight: 79 kg Height: 179 cm Income: \$47k Pets: 1
						
Career: Physician Weight: 73 kg Height: 176 cm Income: \$212k Pets: 2	Career: Nurse Weight: 67 kg Height: 169 cm Income: \$90k Pets: 0	Career: Pilot Weight: 88 kg Height: 185 cm Income: \$186k Pets: 1	Career: Engineer Weight: 82 kg Height: 180 cm Income: \$112k Pets: 0	Career: Business Weight: 84 kg Height: 180 cm Income: \$138k Pets: 1	Career: Chef Weight: 70 kg Height: 169 cm Income: \$55k Pets: 1	Career: Cowboy Weight: 85 kg Height: 183 cm Income: \$83k Pets: 2

[illegible]

1. How many *variables* were recorded from the sample? _____ How many *observations*? _____

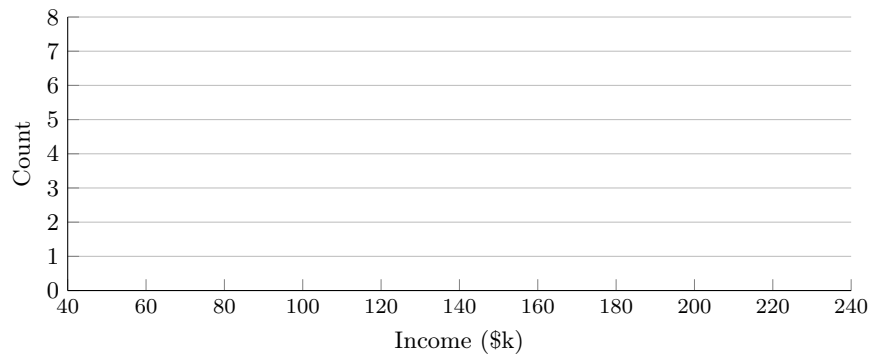
2. Classify each variable (circle one per section).

Variable	Type			Scale			
	Categorical	Quantitative — Discrete.	Quantitative — Continuous	Nominal	Ordinal	Ratio	Interval
Career	<input type="radio"/>	<input type="radio"/>	<input type="radio"/>	<input type="radio"/>	<input type="radio"/>	<input type="radio"/>	<input type="radio"/>
Weight	<input type="radio"/>	<input type="radio"/>	<input type="radio"/>	<input type="radio"/>	<input type="radio"/>	<input type="radio"/>	<input type="radio"/>
Height	<input type="radio"/>	<input type="radio"/>	<input type="radio"/>	<input type="radio"/>	<input type="radio"/>	<input type="radio"/>	<input type="radio"/>
Income	<input type="radio"/>	<input type="radio"/>	<input type="radio"/>	<input type="radio"/>	<input type="radio"/>	<input type="radio"/>	<input type="radio"/>
Pets	<input type="radio"/>	<input type="radio"/>	<input type="radio"/>	<input type="radio"/>	<input type="radio"/>	<input type="radio"/>	<input type="radio"/>

3. Histogram of Income (in \$k)

Tally the counts in each bin (half-open: [a,b)). Add dotted vertical lines for the sample *median* and *mean*.

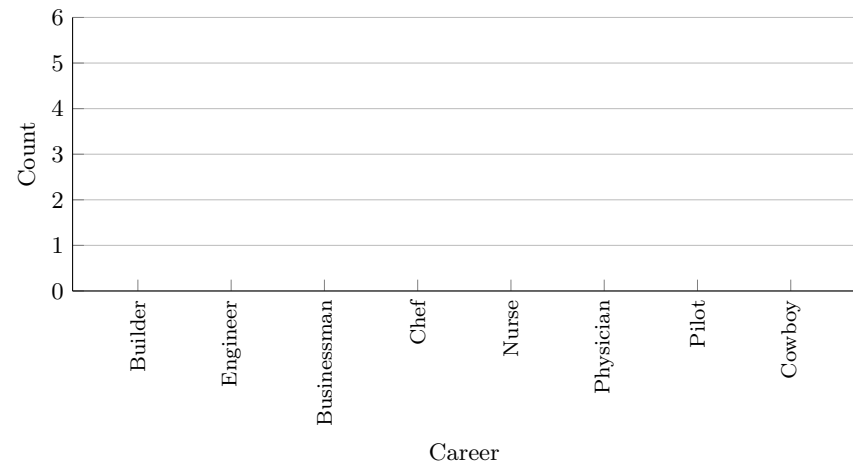
Bin	Count
[40,60)	
[60,80)	
[80,100)	
[100,120)	
[120,140)	
[140,160)	
[160,180)	
[180,200)	
[200,220)	
[220,240)	



4. Bar Chart of Career

Tally the counts and proportions by career, then draw the bars.

Career	Count	Proportion
Builder		
Engineer		
Businessman		
Chef		
Nurse		
Physician		
Pilot		
Cowboy		

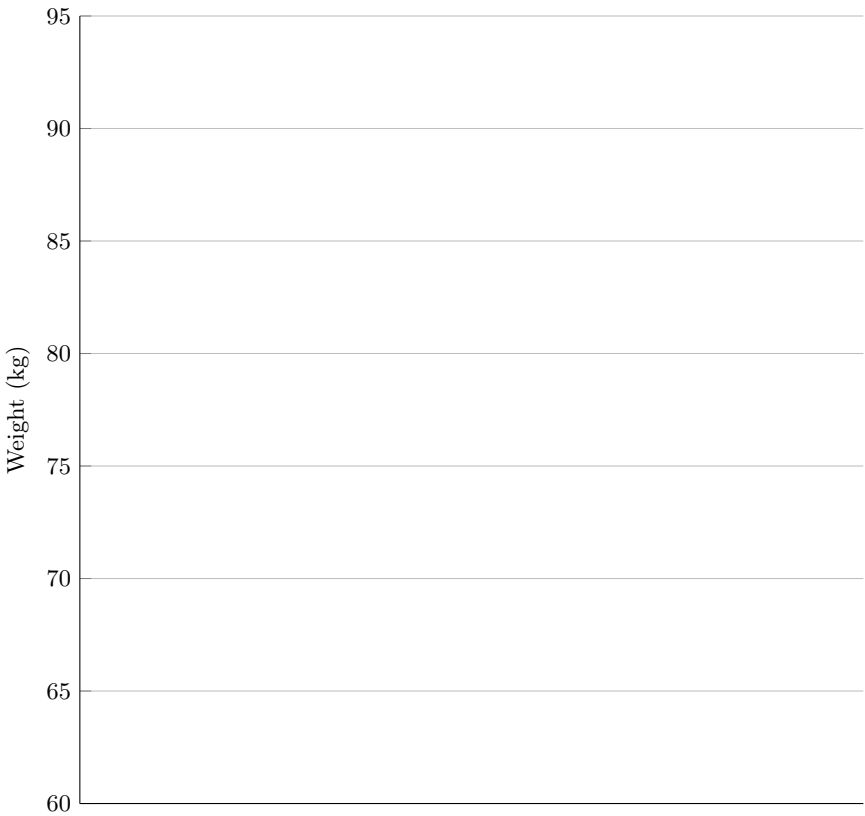


5. Box plot of Weights (kg)

Use the sorted weights below to compute the five-number summary, then sketch the box plot. In solutions mode the box is drawn automatically.

64	66	67	69	69	70	70
72	73	73	75	76	77	77
78	79	79	80	81	82	82
82	83	84	84	85	85	86
86	88	88	89	90	92	

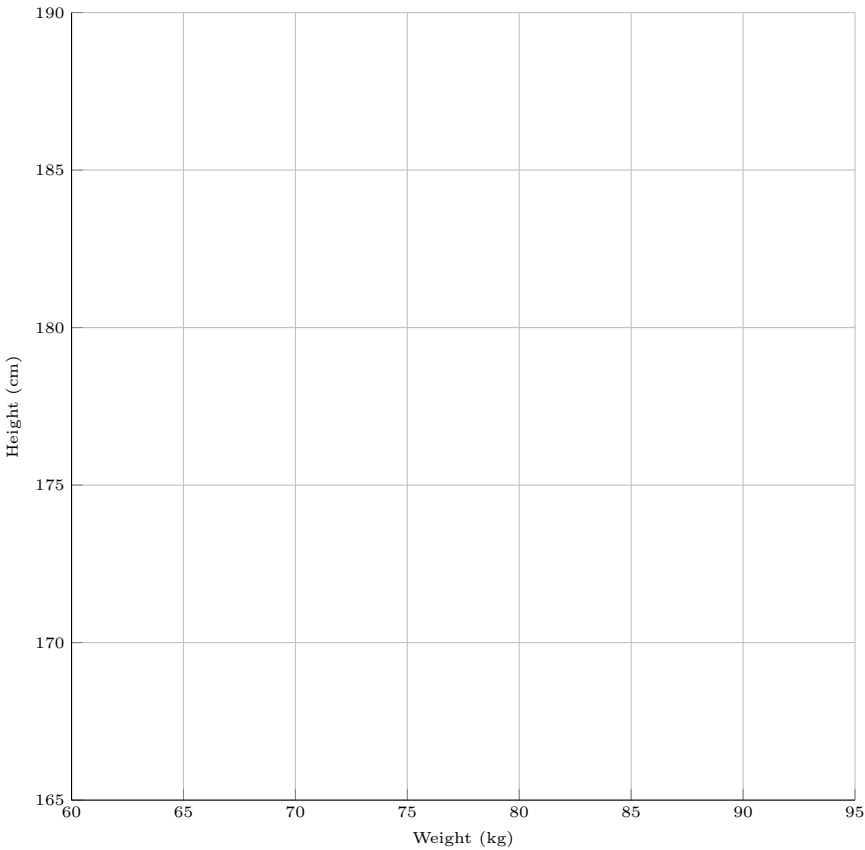
Minimum	
Q1	
Median (Q2)	
Q3	
Maximum	



6. Scatter plot: Weight (kg) vs. Height (cm)

Use the tabulated pairs (kg, cm) to plot the scatter. In solutions mode the points are drawn automatically.

(W,H)		(W,H)		(W,H)		(W,H)		(W,H)	
86	183	81	178	73	171	66	168	78	185
82	181	84	186	92	187	88	182	69	168
72	174	74	179	79	176	77	180	89	186
86	184	70	177	64	165	82	178	76	175
80	182	90	186	85	181	69	170	82	188
75	178	77	173	79	179	73	176	67	169
88	185	83	180	84	180	70	169	85	183

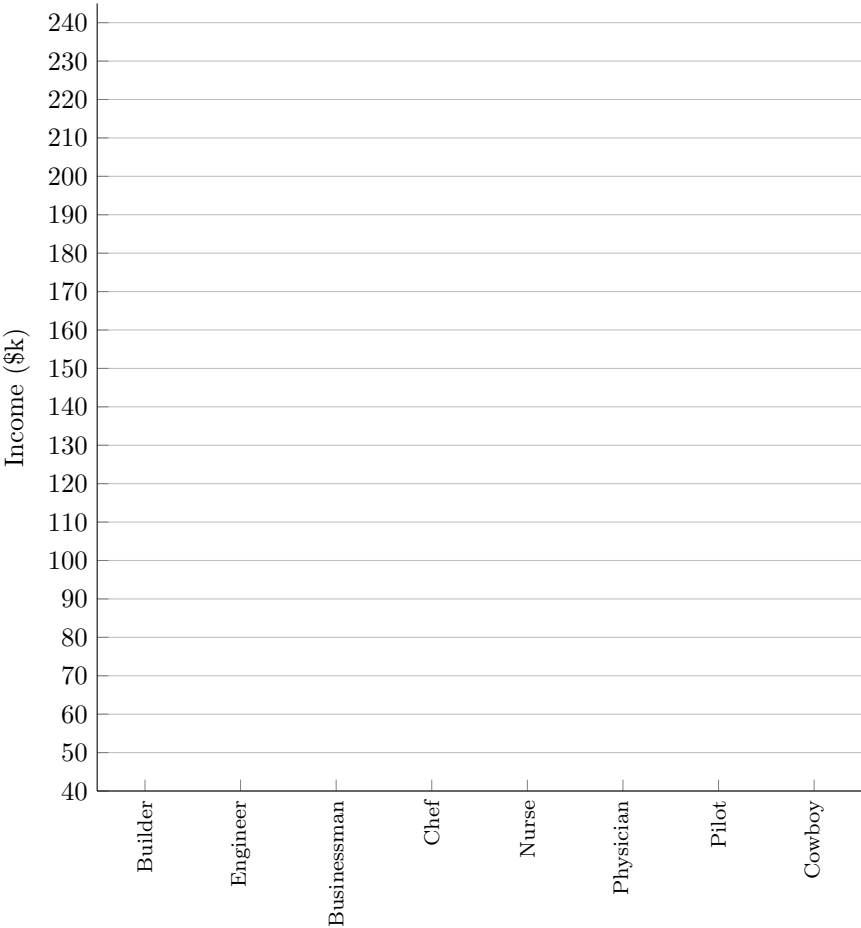


7. What does the scatter plot suggest about the relationship between *Weight* and *Height*? Briefly describe the direction and strength.

8. Income by Career — Pairwise Box Plots

Draw pairwise boxplots so that each box summarizes the income distribution (in \$k) for a career.

Career	Min	Q1	Median	Q3	Max
Builder	72	72	75	78	78
Engineer	112	112	118	127	127
Businessman	121	132	138	149	171
Chef	55	57	62	64	67
Nurse	86	88	90	94	95
Physician	193	204	212	228	239
Pilot	159	165	172	181	186
Cowboy	47	51	53	55	58



9. Basic Probability

Let one person be selected uniformly at random from the 35 individuals. Provide answers as exact fractions and/or decimals.

- 1. $P(\text{Physician}) =$ _____
- 2. $P(\text{Physician and Income} > 200\text{k}) =$ _____
- 3. $P(\text{Income} \geq 100\text{k}) =$ _____
- 4. $P(\text{Engineer} \mid \text{Income} \geq 100\text{k}) =$ _____
- 5. $P(\text{Pilot or Physician}) =$ _____
- 6. $P(\text{Pets} \geq 2) =$ _____
- 7. $P(40\text{k} \leq \text{Income} < 100\text{k}) =$ _____